

### CLASS 3 MATHS WORKSHEET ON TIME

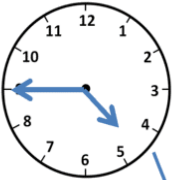




Q1) What the time is it??



**Q2) Match the following:**

a) 6:30	i) quarter past 9
b) 4:25	ii) 10'o clock
c) 9:45	iii) 20 minutes past 3
d) 5:15	iv) 25 minutes to 4
e) 10:00	v) quarter to 5
f) 12:15	vi) half past 6
g) 7:40	vii) quarter to 12
h) 3:20	viii) 20 minutes to 8

**Q3) Match the following:**

	Quarter past 5	5:15
	3 o'clock	4:45
	Quarter to 5	3:00
	8 o'clock	10:30
	Half past 10	8:00

**Q4) Write am and pm:**

- a) I get up at- \_\_\_\_\_
- b) I had my dinner at- \_\_\_\_\_
- c) I came back home after school at- \_\_\_\_\_
- d) I had my Mathematics class at- \_\_\_\_\_
- e) 7'o clock in the evening- \_\_\_\_\_
- f) 3:20 in the afternoon- \_\_\_\_\_
- g) Half past 9 in the morning- \_\_\_\_\_

**Q5) Write the following dates in numerals.**

- a) 21 May 2000 - \_\_\_\_\_
- b) 15 November 2011- \_\_\_\_\_
- c) 18 June 2001- \_\_\_\_\_
- d) 10 January 2015 - \_\_\_\_\_
- e) 2 December 2008 - \_\_\_\_\_

**Q6) Write the following dates using the names of the months.**

- a) 16-08-2005 - \_\_\_\_\_
- b) 30-03-2009- \_\_\_\_\_
- c) 10-09-2014- \_\_\_\_\_
- d) 1-02-2018- \_\_\_\_\_
- e) 28-10-2015- \_\_\_\_\_

**Q7) Write your date of birth both ways.**

**Q8) Fill in the blanks:**

- a) There are \_\_\_\_\_ days in the month of April.
- b) \_\_\_\_\_ is the first month of the year.
- c) \_\_\_\_\_ is the last month of the year.
- d) Leap year has \_\_\_\_\_ days.
- e) There are \_\_\_\_\_ hands in the clock.
- f) 1 hr= \_\_\_\_\_ minutes.
- g) \_\_\_\_\_ month has 28/29 days.

